



Franklin School PTA 2023-2024 School Year

August 22, 2023

Franklin School Science Room



Welcome

- Call to Order
- Principal's Report
- Treasurer's Report
- Standing Committee Reports
- Old Business
- New Business

Principal's Report

- Principal Amy Wright
 - Staffing, building, and schedule updates

Treasurer's Report

- Questions/Comments on draft financials for 2022-2023
- Questions/Comments on draft 2023-2024 draft budget
- CPSF funds
- Washington, D.C. Trip fundraising
- Recruiting for Treasurer for next year



Standing Committees

- Communications
 - Parent Square – Maxine POC
 - Friends of Franklin Facebook Group – Matilda POC
 - Newsletter – Retiring unless we find a leader
 - Interest in developing perpetual printed banners?
- Community Building – Matilda
 - Dine Outs in the works – 6 on the calendar
 - 6th Grade Picnic, Welcome Back Tea, BBQ
- Enrichment
 - After School Spanish, ES Strings, MS Band
 - Math Circle, Chess Club – Need to check in with Nathan and Yalda



FRANKLIN SCHOOL K-8

DINE OUT

CHEESY STUFFED BURGERS

FRIDAY, FEBRUARY 17TH

11 AM - 9 PM

435 SW MADISON AVE CORVALLIS
(541)-995-0638

20% OF DINE IN & TAKE OUT SALES GO TOWARDS FRANKLIN SCHOOL K-8 PTA! Mention the word "Franklin" when ordering

Math Kangaroo 2021 Sample Questions

LEVELS 1 AND 2

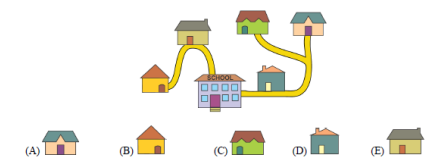
SAMPLE QUESTION FOR 3 POINTS

6. The pink tower is taller than the red tower but shorter than the green tower. The silver tower is taller than the green tower. Which tower is the tallest?

(A) pink tower (B) green tower (C) red tower (D) silver tower
(E) We don't know.

SAMPLE QUESTION FOR 4 POINTS

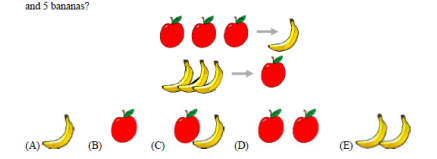
15. The picture shows the five houses of five friends and their school. The school is the largest building in the picture. To go to school, Doris and Ali walk past Leo's house. Eva walks past Chole's house. Which is Eva's house?



(A) (B) (C) (D) (E)

SAMPLE QUESTION FOR 5 POINTS

18. Every time the witch has 3 apples, she turns them into 1 banana. Every time she has 3 bananas, she turns them into 1 apple. What will she end up with if she starts with 4 apples and 3 bananas?




(A) (B) (C) (D) (E)

Copyright since 2003 Math Kangaroo in USA, NFP, Inc. All rights reserved

Standing Committees

- Special Programs
 - Beautification – We need a clean-up day ASAP!
 - Garden – Irrigation planning underway, KG pumpkins
 - OBOB
 - Planning for coming year – recruiting!
 - PTA to purchase two sets of OBOB books for library



Old Business

- Bond Project Updates – Amy and Troy
- Washington D.C. Trip Planning
 - Aug 31 – 6th Grade Picnic table
 - Sept 7 – WADC Committee Meeting
 - Sept 20 – FS Open House table
 - Sept 22 – BBQ table
 - Sept 28 – General parent meeting
 - Schedule bi-weekly meetings through fall and winter



New Business

- Review planned activities for the year
- PTA membership – teachers and staff
- PTA officer and volunteer recruiting
- 8th Grade Field Trip